

Maths

This week our focus times table is: 10 x table

Can you say the whole 10x table? Can you write it?

Challenge: Have someone quiz you to see if you can remember the facts out of order

This week we will be learning about measures. We are going to learn how to recognize and count money and how to tell the time.

Monday – recognise and compare coins and amounts

What are these?



What are they for?

Let's practise recognising and sorting the coins!

<https://www.topmarks.co.uk/money/coins-game>

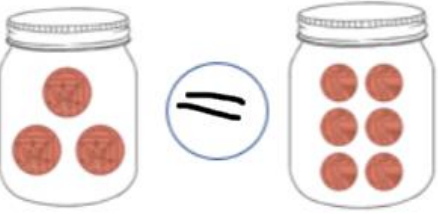
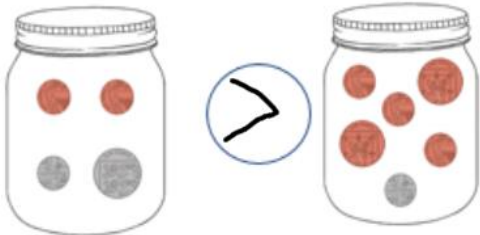

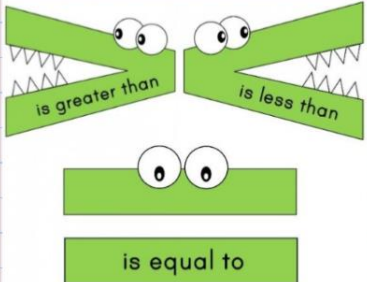
British Coins Word Mat

| | | | |
|--|---|--|---|
|  1p One Penny |  2p Two Pence |  5p Five Pence |  10p Ten Pence |
|  20p Twenty Pence |  50p Fifty Pence |  £1 One Pound |  £2 Two Pounds |

We can compare money using words and symbols

| | |
|--------------|---|
| greater than | < |
| less than | > |
| equal to | = |

Remember: the crocodile always eats the greater number.



Try these in your home learning book.

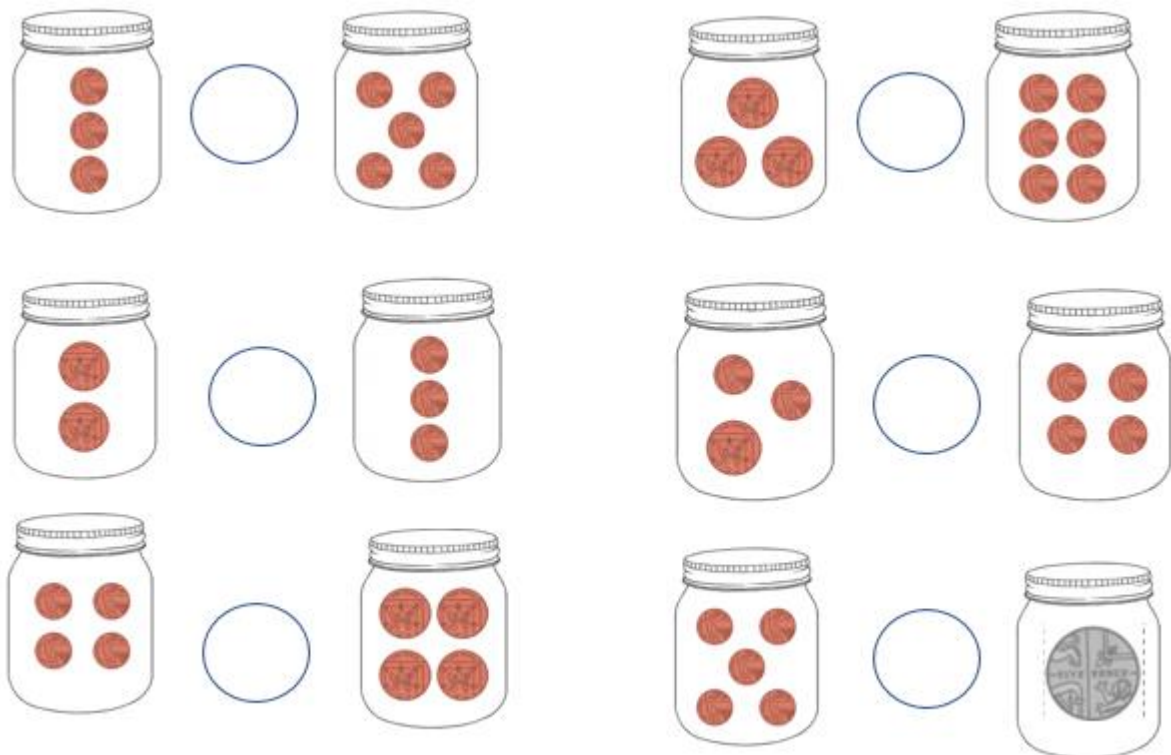
Red

Draw or cut and stick these coins in order from smallest to largest value.



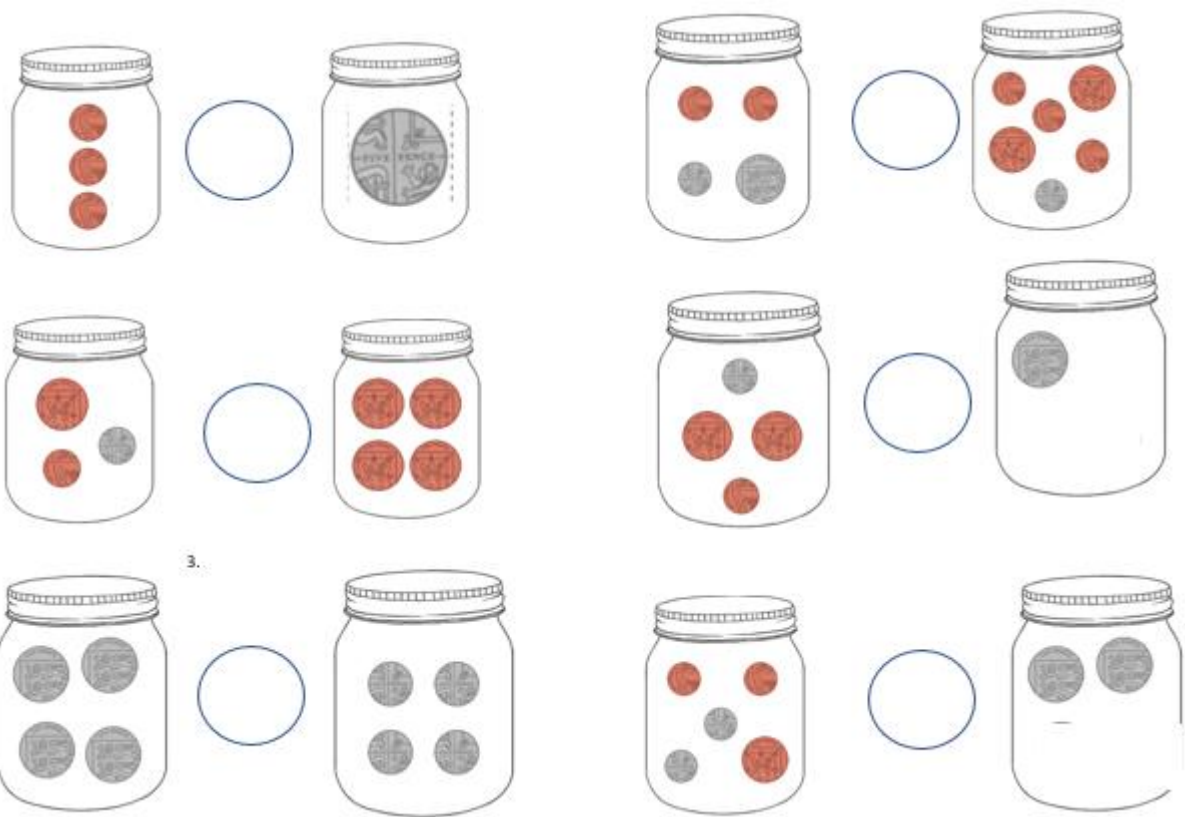
Orange

Count up the amounts in each jar. Then use $<$ $>$ or $=$ to compare the two amounts.



Green

Count up the amounts in each jar. Then use $<$ $>$ or $=$ to compare the two amounts.



Reasoning

Which is the odd one out?

20 p 8 p 2 p 10 p

Why?

Tuesday – finding totals

We can count in 2s 5s and 10s to find amounts of coins

Count up 1ps in 1

Count up 2ps in 2

Count up 5ps in 5

Count up 10p in 10

Count up these amounts and write them in your home learning book.

Red




Orange



Green

Adam has 5 boxes of pencils. Each cost 2p. How much does he pay?



Mona buys 3 planes from the shops. Each cost 10p. How much does she pay?



Sam buys 6 kites from the shops. Each cost 10p. How much does he pay?



Max buys 5 bikes from the shops. Each cost 5p. How much does he pay?



Handa has 4 dolls. Each cost 10p. How much does she pay?



Kal buys 5 Batman dolls. Each cost 10p. How much does he pay?



Reasoning

The tooth fairy left some money for two children.



Jack has 50 pence. Mo has one pound.

Jack thinks he has more money because his coin is physically bigger.

Explain why Jack is wrong.

Wednesday – telling the time to o'clock

We are learning to tell the time to o'clock

When it is o'clock:

the long hand is on the 12

the short hand is on the hour



It is
4 o'clock.

Use this game to help you practise telling the time

https://mathsframe.co.uk/en/resources/resource/116/telling_the_time#

Red

Write the time shown on each clock.



___ o'clock



___ o'clock



___ o'clock



___ o'clock



___ o'clock



___ o'clock



___ o'clock



___ o'clock



___ o'clock



___ o'clock



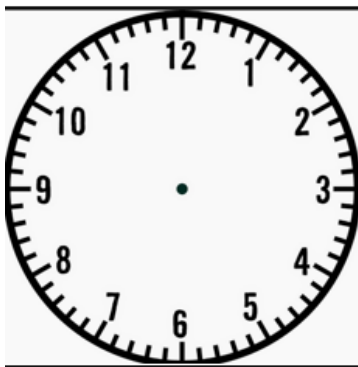
___ o'clock



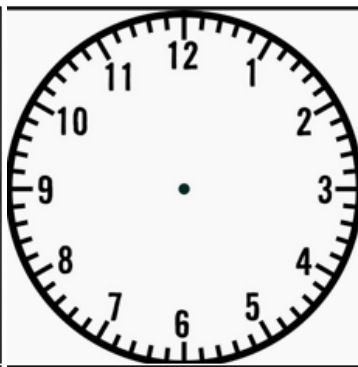
___ o'clock

Orange

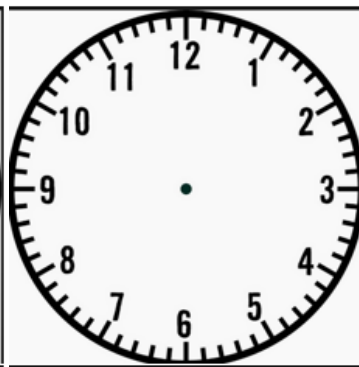
Draw the hands to match these times



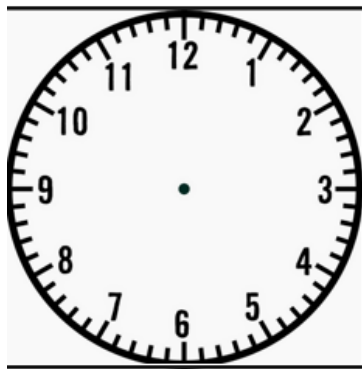
3 o'clock



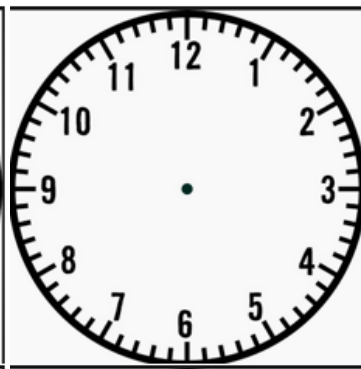
6 o'clock



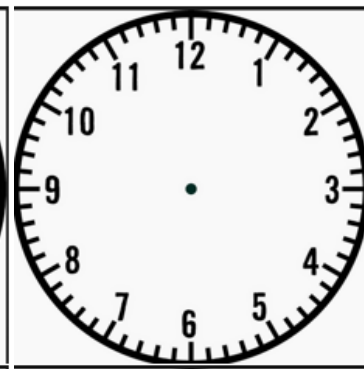
10 o'clock



1 o'clock



8 o'clock



12 o'clock

Green

Write the time that is **1 hour before** the time on each clock.







Write the time that is **1 hour after** the time on each clock.







Write the time that is **2 hours before** the time on each clock.









Write the time that is **2 hours after** the time on each clock.



Reasoning



The time is 3 o'clock.



Amir

Can you spot Amir's mistake?

Thursday – telling the time to half past.

We are learning to tell the time to half past.

When it is o'clock:

the long hand is on the 6

the short hand is **past** the hour















It is
half past 9.

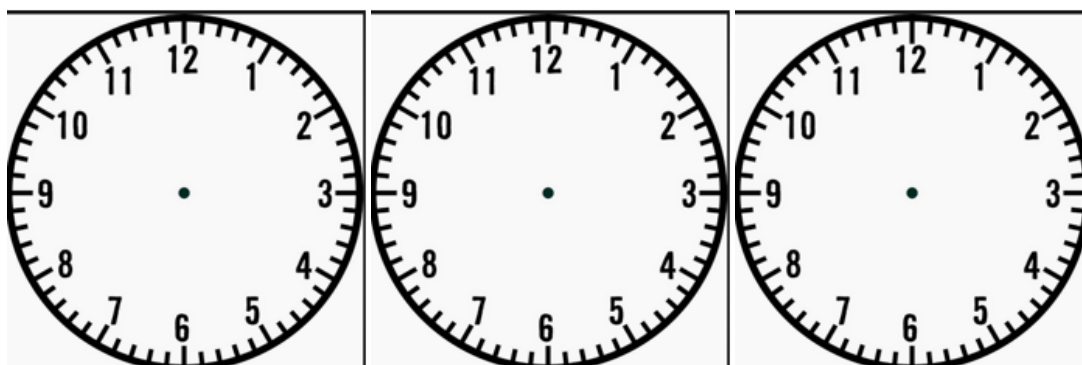
Use this game to help you practise telling the time

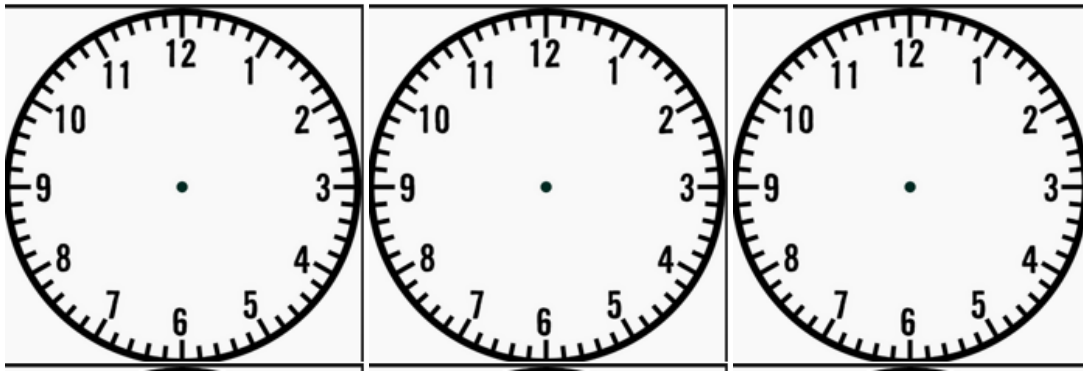
https://mathsframe.co.uk/en/resources/resource/116/telling_the_time#

Red – write the times that match these clocks

| | | |
|--|--|---|
|  _____ |  _____ |  _____ |
|  _____ |  _____ |  _____ |
|  _____ |  _____ |  _____ |
|  _____ |  _____ |  _____ |

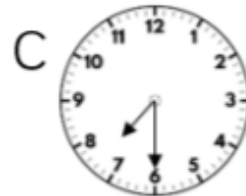
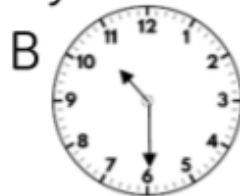
Orange – draw the hands to make these times





Green

Three planes are flying to Paris in the morning.
Here are the times they arrive.



Use **earlier** and **later** to complete the sentences.

Plane A is _____ than Plane B.

Plane B is _____ than Plane C.

Plane C is _____ than Plane A.

Reasoning



Tommy

The time is 6 past 1

Can you spot Tommy's mistake?

Friday – maths games

Try these games to help you practice using measures.

<https://www.topmarks.co.uk/maths-games/5-7-years/money>

<https://www.topmarks.co.uk/maths-games/7-11-years/money>

<https://www.topmarks.co.uk/maths-games/5-7-years/measures>