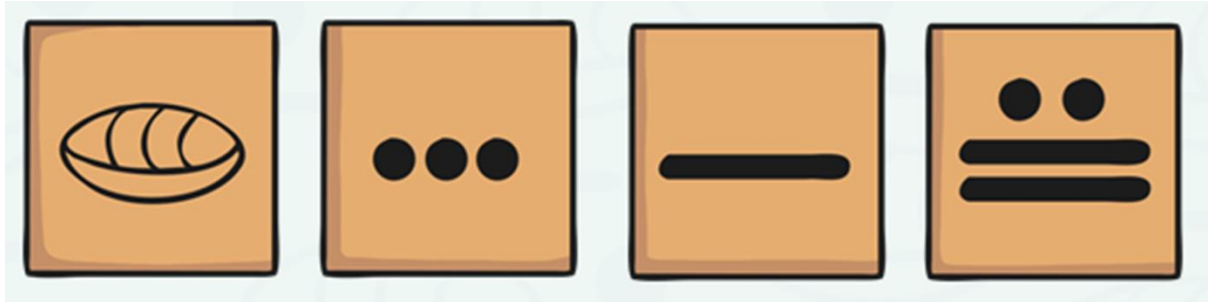
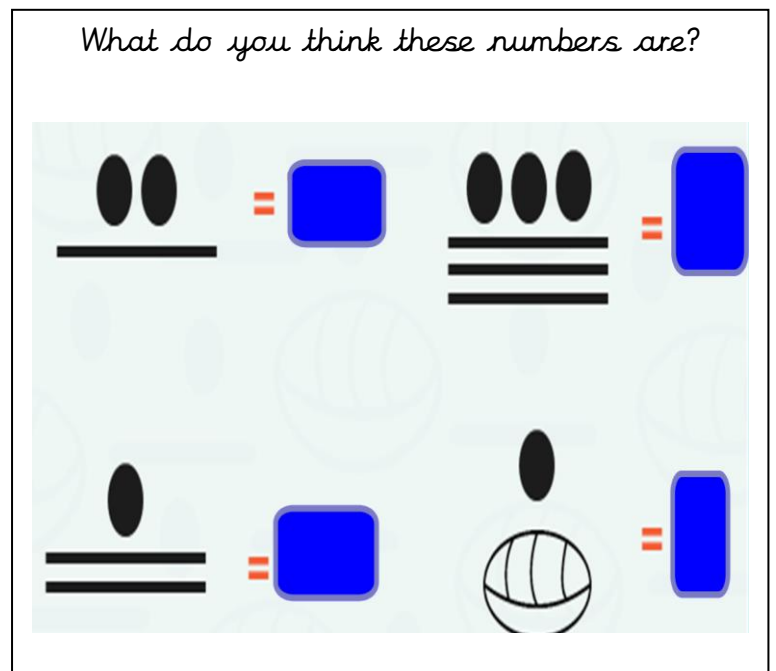
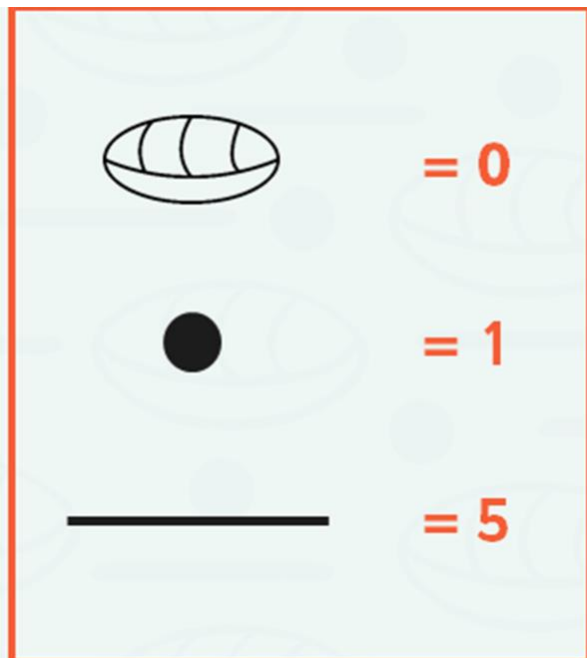


Last week we looked at Gods and this week we are looking at the Mayan's number system.

Try not to look below, can you guess what numbers these symbols represent?



The Mayan people used just three symbols in their number system: shells, sticks and pebbles. Can you infer why?



Were you right?



Try and work out , the symbols for numbers 1 - 19. Follow the pattern! Draw a table neatly in your book. We've given you some to help you ☺ Don't Google it, just try!

| | | | |
|---|----|----|----------|
| 1 | • | 11 | • == |
| 2 | •• | 12 | •• == |

Challenge!

Now think this through because we only have the numbers up to 19. Can you write a calculation using each operation? Leave the answer blank and challenge someone in your house to answer them using your chart.

For example:

$$•• + \frac{••}{=} =$$